

# Klasse 1: Uhrzeit - 1

Name: \_\_\_\_\_

**Aufgabe 1:** Verbinde die Zeit mit der passenden Uhr

7:00



5:00




9:00



1:00



10:00



Aufgabe 2: Verbinde die Zeit mit der passenden Uhr

6:00



8:00




12:00











11:00



4:00




**Aufgabe 3:** Schneide und klebe die richtige Zeit

|   |   |  |   |
|---|---|--|---|
| <br><input type="text"/> | <br><input type="text"/> | <br><input type="text"/> | <br><input type="text"/> |
| <br><input type="text"/> | <br><input type="text"/> | <br><input type="text"/> | <br><input type="text"/> |


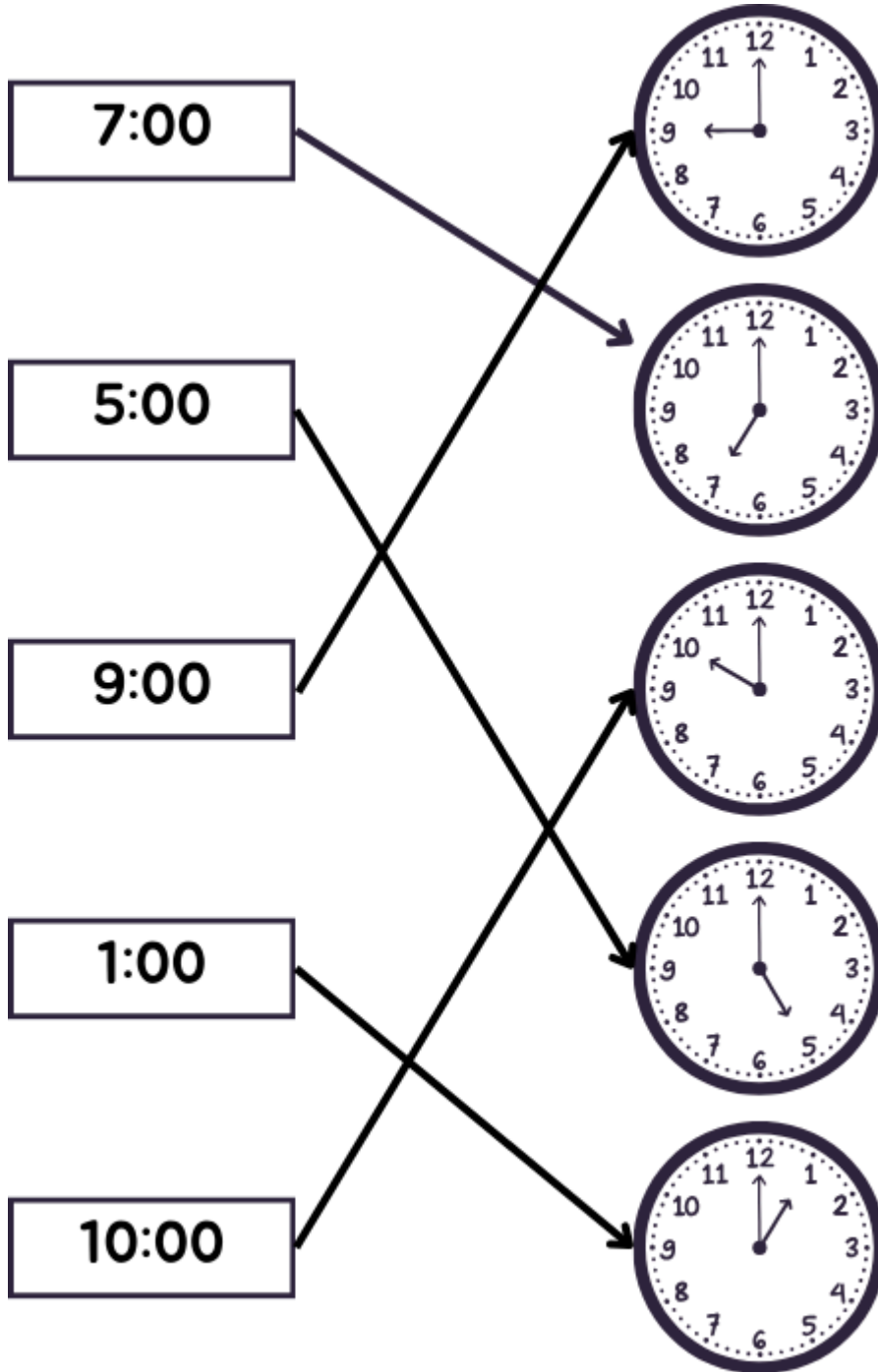


- |      |      |      |       |      |      |      |       |
|------|------|------|-------|------|------|------|-------|
| 4:00 | 6:00 | 5:00 | 11:00 | 2:00 | 9:00 | 1:00 | 10:00 |
|------|------|------|-------|------|------|------|-------|











# Lösungen

Aufgabe 1:



**Aufgabe 2:**

**Aufgabe 3:**

|  |   |  |  |
|--|---|--|--|
| <br>1:00  | <br>4:00 | <br>9:00 | <br>5:00  |
| <br>11:00 | <br>6:00 | <br>2:00 | <br>10:00 |

